



## Class - I Maths January Month Notes

### Time

I. Write the time represented by the give clock.

a)



2:00

Time : 2:oclock

b)




5:30

Time : Half past five

II. Draw hands for the given time.

a) 9 o'clock



b) Half past ten



III. Days of a Week.

There are 7 days in a week

They are:

Monday , Tuesday , Wednesday , Thursday , Friday , Saturday, and Sunday.

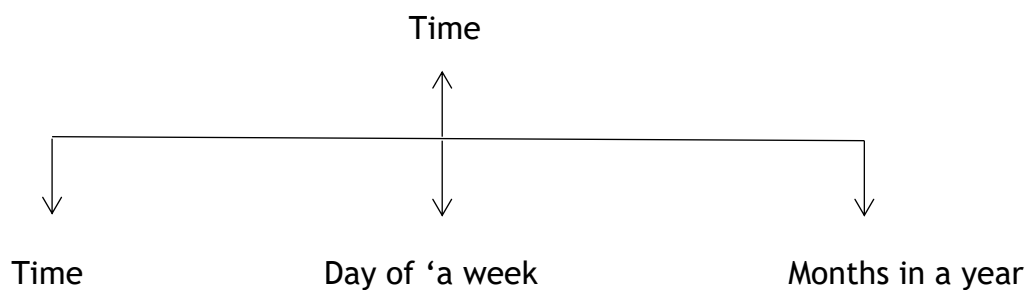
#### IV. Months of a year

There are 12 Months in a year

They are:

Months	Days
January	31
February	28/29
March	31
April	30
May	31
June	30
July	31
August	31
September	30
October	31
November	30
December	31

#### V. Mind map:




## Multiplication Readiness

I. **Definition:** Repeated addition of the same number is known as multiplication. It is denoted by symbol “ $\times$ ”

II. Count write and multiply.

1.



2.



III. Fill in the blanks:

1.  $5 \times 5 = \underline{25}$

2.  $2 \times 6 = \underline{12}$

3.  $10 \times 9 = \underline{90}$

4.  $3 \times 7 = \underline{21}$

IV. Match the following:

**Repeated Addition**

**Multiplication**

1.  $5 + 5$  -

$9 \times 5$  (3)

2.  $4 + 4 + 4 + 4 + 4 + 4$  -

$10 \times 1$  (4)

3.  $9 + 9 + 9 + 9 + 9$  -

$2 \times 6$  (2)

4.  $10$  -

$4 \times 6$  (2)

**V Mind map:**

