



PON VIDYASHRAM GROUP OF CBSE SCHOOLS
ANNUAL EXAMINATION (2017-18)
SOCIAL WORKSHEET

Class: IV

Our Agriculture

I Fill in the blanks

1. The crops which are grown to be used in industries are called _____.
2. _____ is used to make bags and carpets.
3. In hilly regions _____ is used to transport goods.
4. Sugarcane is mostly grown in _____ plains
5. A substance sprayed on crops to keep away harmful insects are called _____.

II Give two examples.

1. Food crops - _____, _____
2. Cash crops - _____, _____
3. Horticultural crops - _____, _____
4. Livestock - _____, _____
5. Crops grown in Uttar Pradesh - _____, _____

IV Who am I?

1. I am type of fishing practiced over the sea.
2. I am cultivated in south and north east India .
3. I am made from coffee bean.
4. I am mostly cultivated in Punjab.
5. I am cultivated near coastal areas.

V Complete the table

Crop	Climate	States
Rice	Hot and wet	_____, _____
_____	Hot and wet	Assam, West Bengal
Wheat	_____	Uttar Pradesh, Punjab

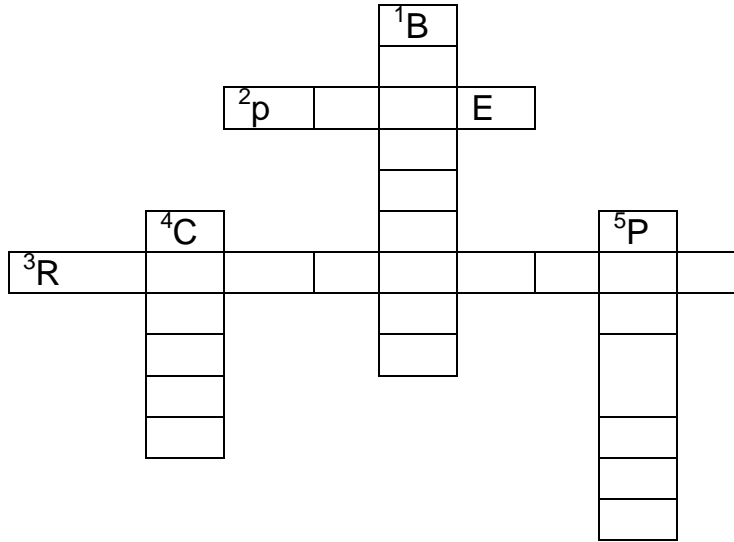
V Answer the following

1. Why agriculture is the main occupation in our country?
2. Mention the cash crops grown in the hot and moist climate.
3. What are cash crops?
4. How does livestock rearing useful to us?
5. How do farmers improve their production?

Our Industries

I Read the clues and complete the puzzle

1. This place is very famous for aircraft manufacturing.
2. Automobile industry in Maharashtra.
3. The material used to satisfies our needs.
4. An example for large scale industry.
5. The place where railway equipment manufactured in Tamil Nadu.



II Match the following

- | | | |
|-------------------------|---|----------------------|
| 1. Pickle making | - | Raw material |
| 2. Stocking and socks | _ | Cottage Industry |
| 3. Iron and steel plant | _ | Ship building |
| 4. Cotton | _ | Small scale Industry |
| 5. Visakhapatnam | _ | Large scale Industry |

III Identify the picture and write a sentence about it



1. _____



2. _____



3. _____

4. _____

IV Answer the following

1. What are the raw materials required for aircraft manufacturing industry?
2. Define Industry. Name the things needed to set up an industry.
3. Differentiate cottage Industries with large scale Industries.
4. What are the major industries found in Jharkhand?
5. Which industry is popular in Nasik?

Southern Plateaus and the Islands

I Analogy

1. Farming : Andaman and Nicobar ; _____ : Lakshadweep.
2. Lavani : Maharashtra ; Kuchipudi : _____
3. North : _____ ; South : Deccan Plateau
4. _____ : Minerals ; Hyderabad : Industries
5. Anai Mudi : Highest peak ; Godavari : _____

II Fill in the blanks

1. The Jog falls is in _____.
2. _____ Park protect tigers in Madhya Pradesh.
3. _____ is an island in the Bay of Bengal.
4. Fishing and _____ are the main occupations of the people of Lakshadweep.
5. Bhilai is famous for _____.

III Puzzle

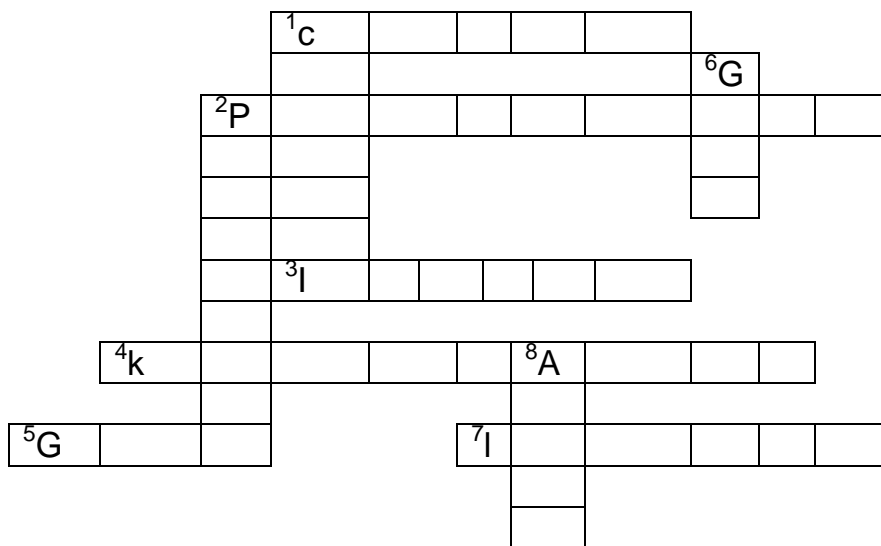
Across

1. The substance formed from the skeletons and remains of sea creatures.

2. Land surrounded by water on three sides.
3. Andaman and Nicobar and Lakshadweep are a group of_____.
4. Capital of Lakshadweep.
5. National park that is home to Asiatic lion.
- 7.Backwater of sea or lakes

Down

- 1.The third largest port in India.
2. Capital of Andaman and Nicobar islands.
6. The Konkan coast extends from the _____ of Khambat to Goa
- 8.The milk capital of India.



IV Answer the following

1. Name the plateaus surrounded by central highlands.
2. Which state is rich in forest product? How does it help to the mankind?
3. Describe about cellular Jail.
4. What is the importance of Mumbai High.
5. Enlist the rivers flow through Deccan Plateau.

Our Soils

I Identify the following crops.Name in which type of soil they grow and where they are grown in India



1. _____

2. _____



3. _____

4. _____

II Soil become infertile due to pollution. Tick the items () that can pollute the soil and put a cross(x) against the ones that cannot

1. Fallen leaves _____
2. Chemical fertilizer _____
3. Broken bottles _____
4. Sewage discharge from pipes _____
5. Batteries _____
6. Banana peels _____
7. Juice cans _____
8. Vegetable peels _____
9. Torn shoes _____
10. Pencil Shaving _____

III Who am I?

1. I am sandy and infertile.
2. I am the friend of farmers.
3. I am formed from lava rocks.
4. I am used to make bricks.
5. I am found on the hill slopes.

IV Answer the following

1. How is soil made?
2. Why is cutting down trees not good for the soil?
3. What is the special feature of the black soil? What crops can be grown there?
4. How can we prevent soil erosion?
5. Define (i)Manure (ii)Humus

Our Forests

I Name the following

1. The other name given to tropical rain forest _____.
2. The forest in which Babul and kikar are found _____.
3. The trees found in Sundarbans _____.
4. The forest that support paper Industry _____.
5. The movement supported by Sunderlal Bahuguna _____.

II Find the trees hidden in the grid and say in which forest they are found

S	A	L	A	R	L	B	J
U	Q	A	R	T	E	A	K
N	F	D	W	J	K	M	I
D	L	H	E	K	Z	B	X
A	G	R	I	R	V	O	P
R	O	S	E	W	O	O	D
I	P	O	B	S	B	Y	E
J	M	W	O	Y	N	R	O
D	P	I	N	E	E	T	D
S	M	S	Y	J	Y	W	A
A	E	S	Q	D	F	I	R

1. _____
2. _____
3. _____
4. _____
5. _____
6. _____
7. _____
8. _____

III Write the name of these trees in the correct column

(Deodar, Mahagony, teak, sal, Babool, Chir, Keekar, Rosewood)

Evergreen	Deciduous	Thorn	Mountain
_____	_____	_____	_____
—	—	—	—
_____	_____	_____	_____
—	—	—	—

IV Answer the following

1. Name two national park where the tiger is protected.
2. How are forests important to us?
3. Why has the government set up national parks and wild life sanctuaries?
4. What is afforestation?
5. Differentiate evergreen forest with deciduous forest.

Emperor Akbar

I Who am I?

1. I was built by Akbar.
2. I was the singer in Akbar's court.
3. I am the father of Emperor Akbar.
4. I was the ruler of Ahmadnagar.
5. I was fond of flying kites.


II Match the following

- | | | |
|--------------------|---|-------------|
| 1. Galileo Galilei | - | Mewar |
| 2. Sant Tulsidas | - | Akbarnama |
| 3. Maharana Pratap | - | Astronomer |
| 4. Abul fazl | - | Agra |
| 5. Fatehpur sikri | - | Indian poet |

III Identify the picture and write a sentence about it



1. _____



2. _____



3. _____



4. _____

IV Answer the following

1. How did Akbar gain the support of the Rajputs?
2. Name the two epics.
3. Who were the rulers defeated by Akbar?
4. Describe about Din-i-Ilahi
5. Enlist the Ministers in Akbar's court.

Our Rights & Duties

I Write fundamental Right or fundamental Duty in the space provided

1. We can follow any religion _____.
2. We must be united as Indians _____.
3. We can express our opinions & ideas without fear _____.
4. We must work to maintain the unity of the nation _____.
5. We should not discriminate on grounds of religion caste etc _____.
6. We must respect the National Anthem as well as the national flag _____.

II Identify the picture and write a sentence about it



1. _____

2.



3. _____

4. _____

III Who am I?

1. I came into effect on republic day.
2. I am the property owned by government.
3. I was born and live in a country.
4. I was the architect of the constitution of India.

IV Fill in the blanks

1. Children working in a factory are called _____.
2. Every child goes to _____.
3. The Directive principles listed in our constitution were adopted from the constitution of _____.
4. Cultural and educational right protect the _____.
5. A country governed by the representatives elected by the people is called _____.

V Answer the following

1. What is constitution?
2. Which country has the longest written constitution?

3. What are the guidelines given in the constitution for our government called?
4. Write any four fundamental duties mentioned in the constitution.
5. List any three Directive principles.

The Age of Exploration

I. Fill in the Blanks

1. Ferdinand Magellan was a _____ explorer.
2. _____ is used to know the location of the ship during sailing.
3. India became a colony of the _____.
4. Vasco da Gama loaded his ships with _____.
5. Trade with _____ was very important for the Europeans.

II. Give two examples

1. Ships used by explorers - _____, _____.
2. Portuguese explorers - _____, _____.
3. Instruments used by sailors- _____, _____.

III. Match the following

- | | | |
|-----------------------|---|------|
| 1. Bartholomew Diaz | - | 1498 |
| 2. Ferdinand Magellan | - | 1488 |
| 3. Columbus | - | 1520 |
| 4. Vasco da Gama | - | 1492 |

IV. Identify the picture and write the sentence about it.



1. _____

2. _____



3. _____

4. _____

V. Analogy

1. Bartholomew Diaz : Portuguese ; _____ : Italian.

2. Compass : Direction ; _____ :
Location.

3. _____ : Cape of Good Hope ; Columbus : New world.

VI. Answer the following

1. Why did Europeans find a sea route to the east?
2. Briefly explain about the voyage of Ferdinand Magellan.
3. Name the instruments used by the Sailors.
4. Enlist the name of the explorers from different countries.
5. Bartholomew Diaz decided to turn back from the Cape of storms. Give reason.